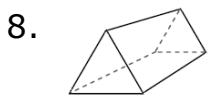
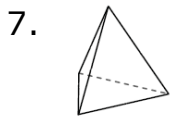
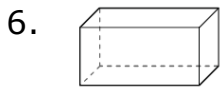


Classifying solids: Worksheet 1.2

Name Date Score

Use the diagrams to identify the names of the following shapes.



Solutions: Worksheet 1.2

1. Rectangular prism
2. Triangular prism
3. Cylinder
4. Triangular prism
5. Cylinder
6. Rectangular prism
7. Triangular pyramid
8. Triangular prism
9. Rectangular prism
10. Sphere

