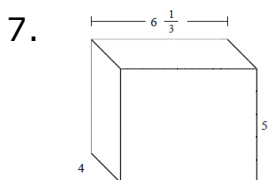
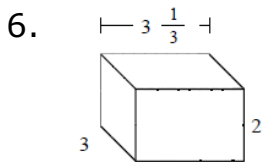
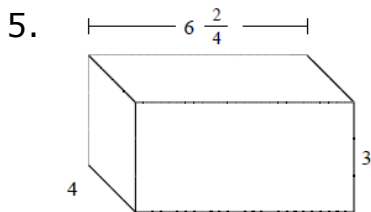
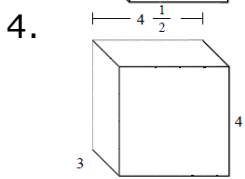
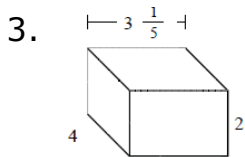
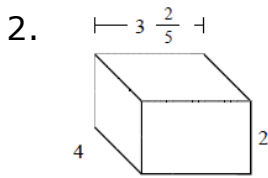
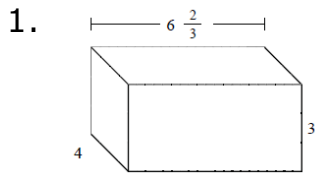


Volume of a rectangular prism with fractional edge lengths: Worksheet 6.2

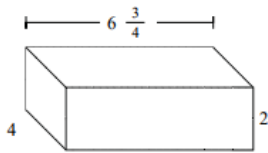
Name Date Score

Find the volume of following rectangular prism with fractional edge lengths. Each prisms unit is measured in cm (not to scale)

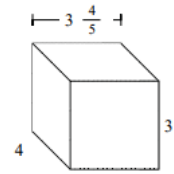


Solutions: Worksheet 6.2

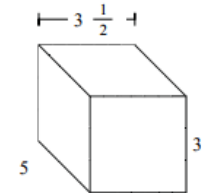
8.



9.



10.



Solutions

1. Volume = 80 cu cm

2. Volume = $27 \frac{1}{5}$ cu cm

3. Volume = $25 \frac{3}{5}$ cu cm

4. Volume = 54 cu cm

5. Volume = 78 cu cm

6. Volume = 20 cu cm

7. Volume = $126 \frac{2}{3}$ cu cm

8. Volume = 54 cu cm

9. Volume = $45 \frac{3}{5}$ cu cm

10. Volume = $52 \frac{1}{2}$ cu cm



Solutions: Worksheet 6.2

