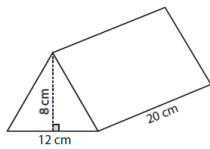


Volume of a Triangular Prism: Worksheet 9.1

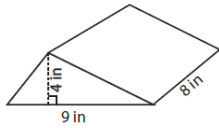
Name Date Score

Find the volumes of the following triangular prisms.

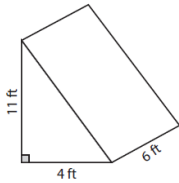
1.



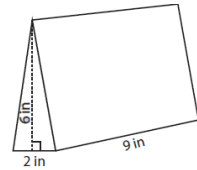
2.



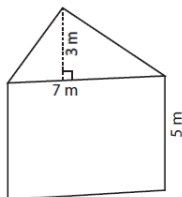
3.



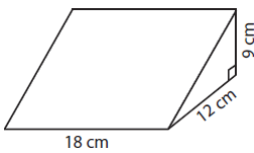
4.



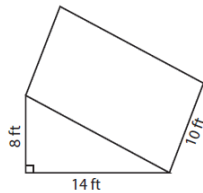
5.



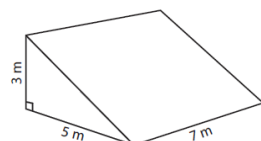
6.



7.



8.

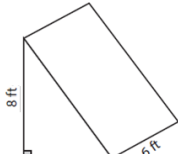


9.



Solutions: Worksheet 9.1

10.



Solutions

1. Volume of the triangular prism = 960 cu cm
2. Volume of the triangular prism = 144 cu in
3. Volume of the triangular prism = 132 cu ft
4. Volume of the triangular prism = 64 cu in
5. Volume of the triangular prism = 52.5 cu in
6. Volume of the triangular prism = 972 cu cm
7. Volume of the triangular prism = 560 cu ft
8. Volume of the triangular prism = 52.5 cu m
9. Volume of the triangular prism = 1072.5 cu ft
10. Volume of the triangular prism = 336 cu ft

