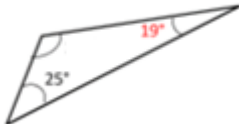


Finding an angle measure of a triangle given two angles: Worksheet 7.3

Name Date Score

Find the missing angles in the given triangles below. Sum of angles in a triangle is 180° .

1.



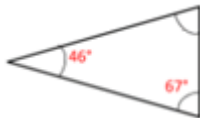
2.



3.



4.




5.



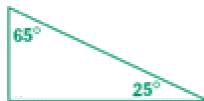
6.



7.



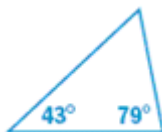
8.



9.



10.



Solutions: Worksheet 7.3

1. 136°
2. 28°
3. 31°
4. 67°
5. 21°
6. 66°
7. 40°
8. 90°
9. 96°
10. 58°

