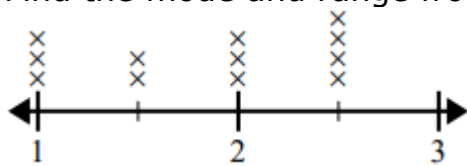


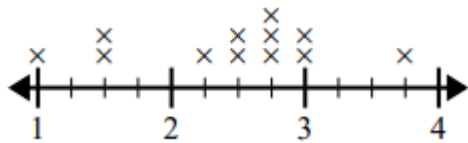
Finding the mode and range from a line plot: Worksheet 3.2

Name Date Score

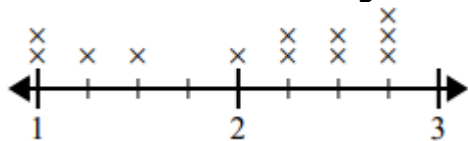
1. Find the mode and range from the following line plot



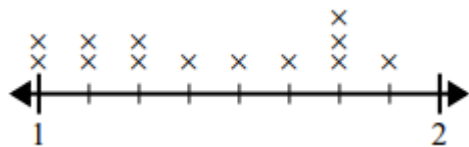
2. Find the mode and range from the following line plot



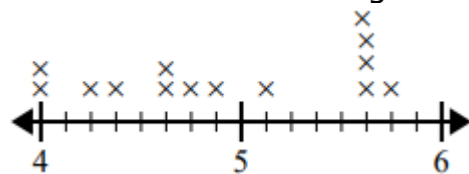
3. Find the mode and range from the following line plot



4. Find the mode and range from the following line plot

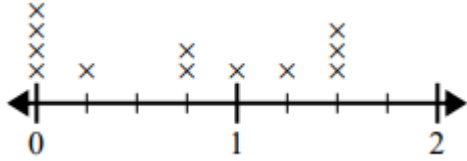


5. Find the mode and range from the following line plot

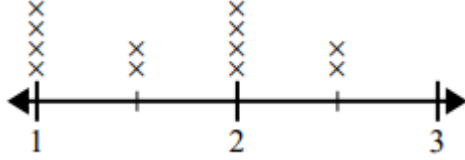


Solutions: Worksheet 3.2

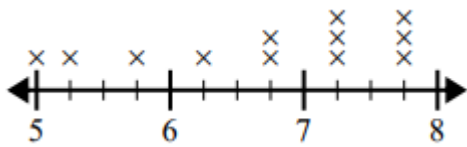
6. Find the mode and range from the following line plot



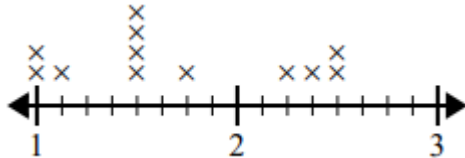
7. Find the mode and range from the following line plot



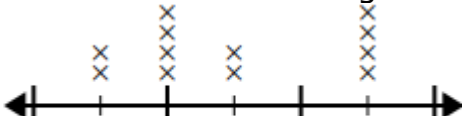
8. Find the mode and range from the following line plot



9. Find the mode and range from the following line plot



10. Find the mode and range from the following line plot



Solutions: Worksheet 3.2

1. Mode = 2.5; Range = 1.5
2. Mode = 2.75; Range = 2.25
3. Mode = 2.75; Range = 1.75
4. Mode = $1 \frac{6}{8}$; Range = $\frac{6}{8}$
5. Mode = $5 \frac{5}{8}$; Range = $4 \frac{5}{8}$
6. Mode = 0; Range = 1.5
7. Mode = 1, 2; Range = 1.5
8. Mode = 7.25, 7.75; Range = 2.75
9. Mode = $1 \frac{4}{8}$; Range = $1 \frac{4}{8}$
10. Mode = 47, 48.5; Range = 2

