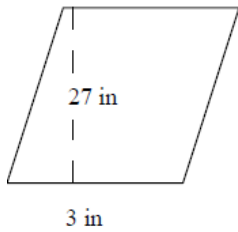


Area of a parallelogram: Worksheet 16.2

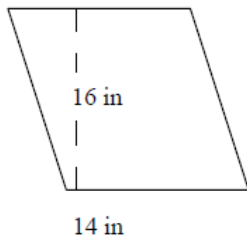
Name Date Score

Find the areas of the following parallelograms.

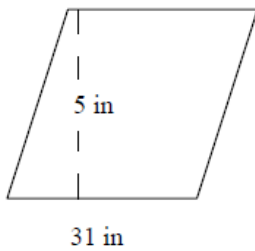
1.



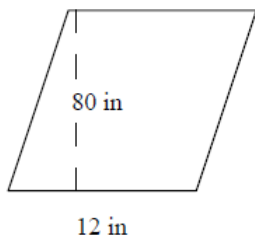
2.



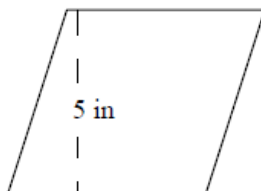
3.



4.

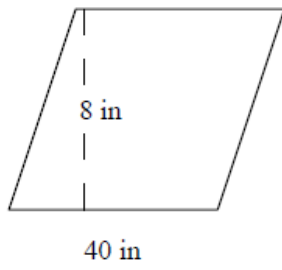


5.

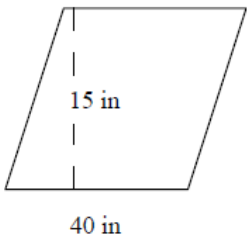


Solutions: Worksheet 16.2

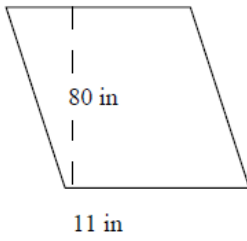
6.



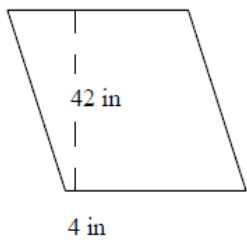
7.



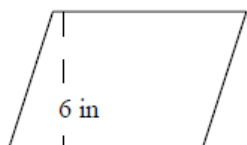
8.



9.



10.



Solutions: Worksheet 16.2

1. Area of parallelogram = 81 square inches
2. Area of parallelogram = 224 square inches
3. Area of parallelogram = 155 square inches
4. Area of parallelogram = 960 square inches
5. Area of parallelogram = 40 square inches
6. Area of parallelogram = 320 square inches
7. Area of parallelogram = 600 square inches
8. Area of parallelogram = 880 square inches
9. Area of parallelogram = 168 square inches
10. Area of parallelogram = 540 square inches

