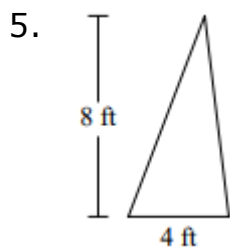
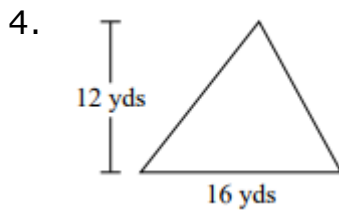
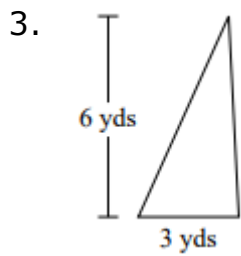
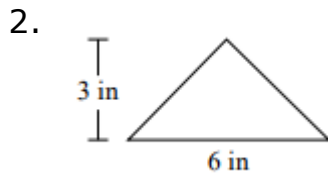
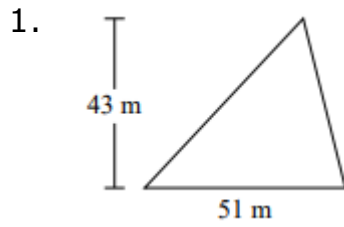


# Area of a triangle: Worksheet 13.3

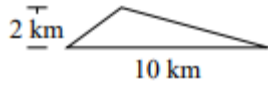
Name ..... Date ..... Score .....

Find the area of each triangle.

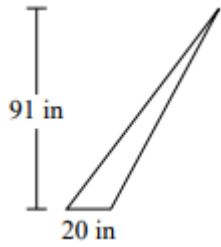


# Solutions: Worksheet 13.3

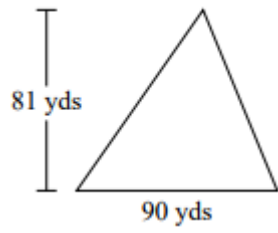
6.



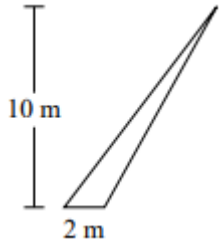
7.



8.



9.



10.



## Solutions: Worksheet 13.3

1. Area of triangle = 1096.5 square m.
2. Area of triangle = 9 square in.
3. Area of triangle = 9 square yd.
4. Area of triangle = 96 square yd.
5. Area of triangle = 16 square ft.
6. Area of triangle = 10 square km.
7. Area of triangle = 910 square in.
8. Area of triangle = 3645 square yd.
9. Area of triangle = 10 square m.
10. Area of triangle = 620 square ft.

