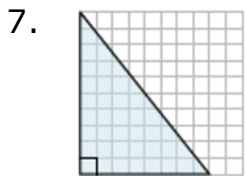
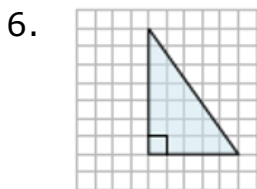
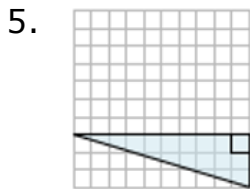
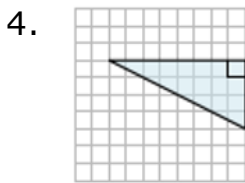
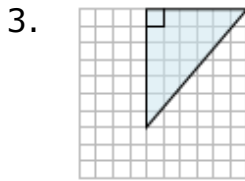
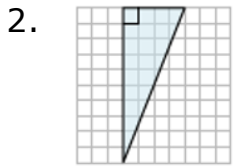
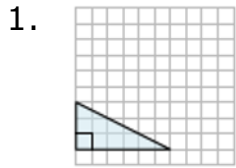


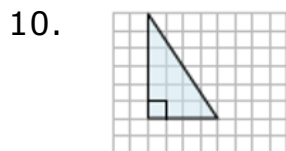
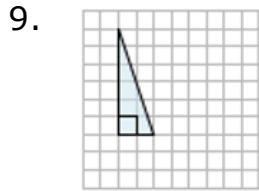
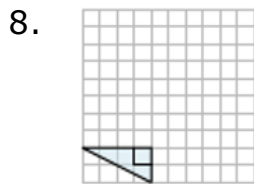
Finding the area of a right triangle on a grid: Worksheet 11.1

Name Date Score

Find the areas of the right triangles on a grid



Solutions: Worksheet 11.1



Solutions

1. Area of right triangle on the grid = 7.5 square units
2. Area of right triangle on the grid = 20 square units
3. Area of right triangle on the grid = 21 square units
4. Area of right triangle on the grid = 16 square units
5. Area of right triangle on the grid = 15 square units
6. Area of right triangle on the grid = 17.5 square units
7. Area of right triangle on the grid = 40 square units
8. Area of right triangle on the grid = 4 square units



Solutions: Worksheet 11.1

9. Area of right triangle on the grid = 6 square units
10. Area of right triangle on the grid = 12 square units

