

Writing an equation and drawing its graph to model a real-world situation: Basic: Worksheet 11.2

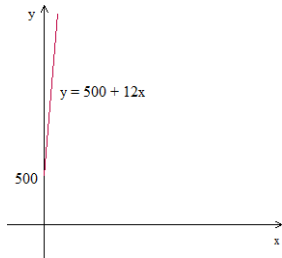
Name Date Score

1. Let y be the amount of water in a pond and let x be the number of minutes water flows into it. Write an equation relating y to x and then graph the equation. Initially 500 liters of water is in the pond; the rate at which water flows into the pond is 12 liters per minute.
2. John's party costs \$110 plus \$7 for every guest he invites. Let y be the total cost of party and x be the number of guests. Write an equation in x and y and graph it.
3. Anita already has 5 bracelets, and new bracelets are priced \$4 each. Let y be the total number of bracelets and x be the number of new bracelets. Write an equation in x and y and graph it.
4. Gracie is putting \$220 in a savings account and adding \$35 each week. Let y represent the total amount saved and let x represent the number of weeks Gracie has been adding money. Write an equation relating y and x and graph it.
5. Ella has walked 24 kilometers, further she plans to walk 2 kilometer during each trip to work. Let y be the total distance walked and x be the number of trips she makes. Write an equation an equation in x and y and graph it.
6. Nathan has made 15 liters of jam and will make an additional 2 liter of jam every day. If y is the number of liters of jam made and x is the number of days, write an equation relating y and x and graph it.
7. Donald has 8 stamps and buys 3 stamps during each day of vacation. Let y be the total number of stamps Donald has and x be the days of vacation. Write an equation in x and y and graph it.
8. Jesse has savings of \$45 and earns \$7 for each hour of lawn mowing. If y is the total amount with Jesse and x is the number of hours he works, write and equation in y and x and graph it.
9. Lyra has already written 35 pages and she writes 6 pages per hour. Let y be the total pages written and x the number of hours she writes. Write an equation in y and x and graph it.
10. Vista Car Rentals charge a base charge of \$90 and \$22 per hour for renting cars. Let y represent the total bill amount and x be number of hours the car is rented. Write an equation relating y and x and graph it.

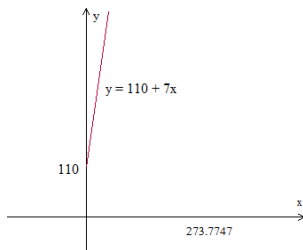


Solutions: Worksheet 11.2

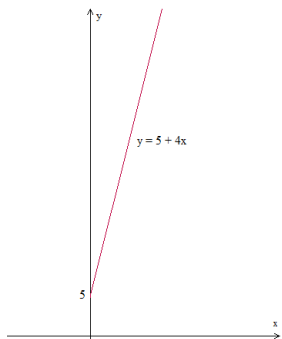
1. $y = 500 + 12x$




2. $y = 110 + 7x$



3. $y = 5 + 4x$

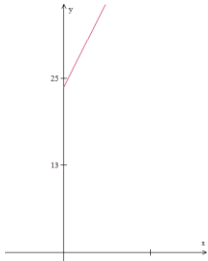


4. $y = 220 + 35x$

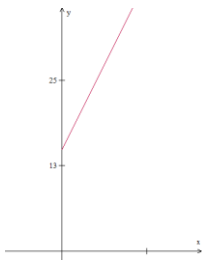


Solutions: Worksheet 11.2

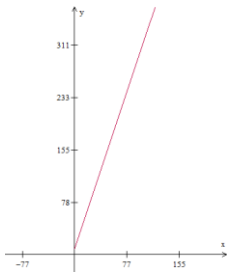
5. $y = 24 + 2x$



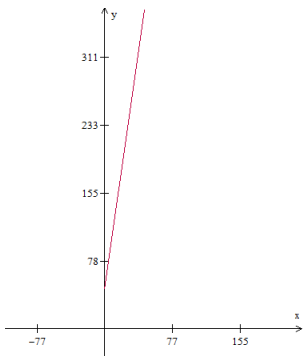
6. $y = 15 + 2x$



7. $y = 8 + 3x$



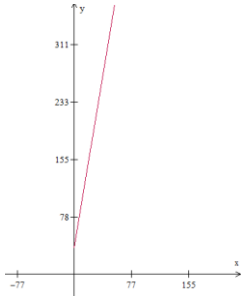
8. $y = 45 + 7x$



9. $y = 35 + 6x$



Solutions: Worksheet 11.2



10. $y = 90 + 22x$

