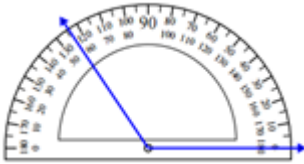


# Measuring an angle with the protractor: Worksheet 1.2

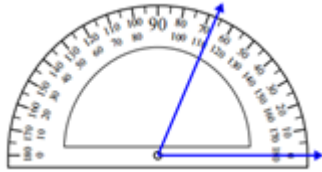
Name ..... Date ..... Score .....

Measure each of the angles given below using the protractor.

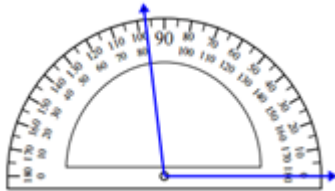
1.



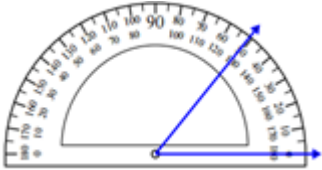
2.



3.



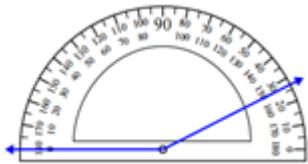
4.



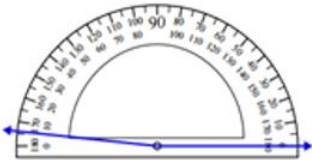
5.



6.



7.

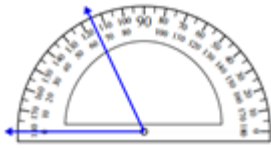


8.

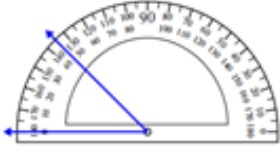


## Solutions: Worksheet 1.2

9.



10.



1.  $125^\circ$

2.  $67^\circ$

3.  $97^\circ$

4.  $51^\circ$

5.  $166^\circ$

6.  $153^\circ$

7.  $175^\circ$

8.  $98^\circ$

9.  $65^\circ$

10.  $45^\circ$

