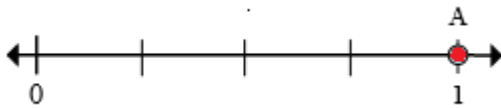


# Fractional position on a number line: Worksheet 6.3


Name ..... Date ..... Score .....

1.



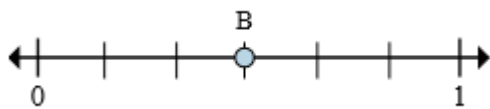
What is the position of A on the number line? Write your answer as a fraction.

2.



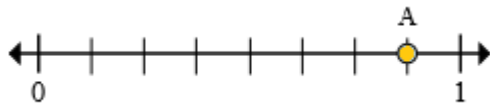
What is the position of C on the number line? Write your answer as a fraction.

3.



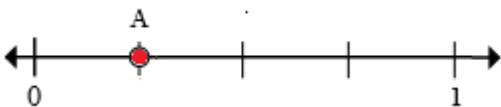
What is the position of B on the number line? Write your answer as a fraction.

4.



What is the position of A on the number line? Write your answer as a fraction.

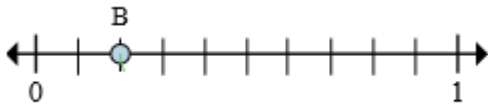
5.



What is the position of A on the number line? Write your answer as a fraction.



6.



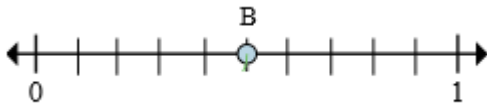
What is the position of B on the number line? Write your answer as a fraction.

7.



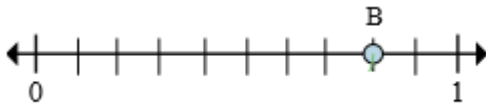
What is the position of B on the number line? Write your answer as a fraction.

8.



What is the position of B on the number line? Write your answer as a fraction.

9.



What is the position of B on the number line? Write your answer as a fraction.

10.



What is the position of A on the number line? Write your answer as a fraction.



## Solutions: Worksheet 6.3

1.  $4/4$
2.  $2/3$
3.  $3/6$
4.  $7/8$
5.  $1/4$
6.  $2/10$
7.  $3/10$
8.  $5/10$
9.  $8/10$
10.  $10/10$

