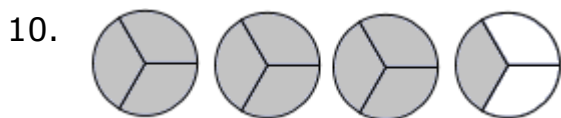
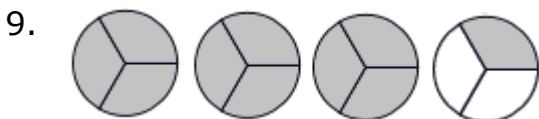
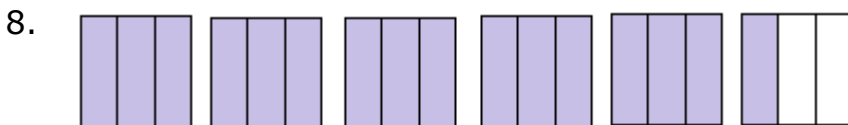
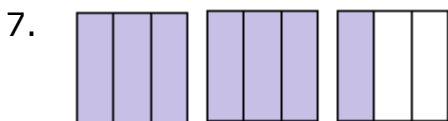
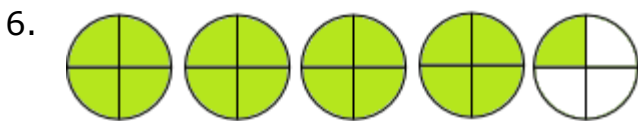
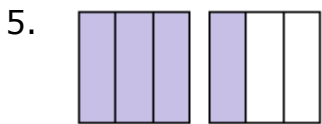
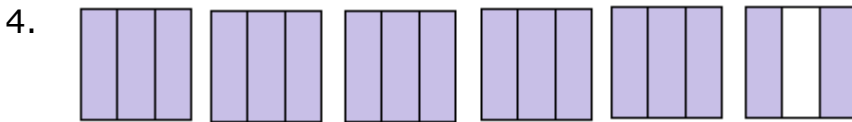
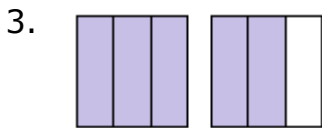
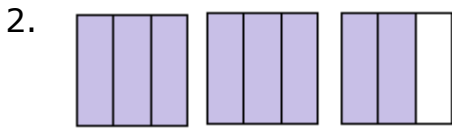


# Writing a mixed number and an improper fraction for a shaded region: Worksheet 1.3

Name ..... Date ..... Score .....

Write a mixed number for each of the shaded regions given below.



## Solutions: Worksheet 1.3

1.  $3\frac{1}{4}$

2.  $2\frac{2}{3}$

3.  $1\frac{2}{3}$

4.  $5\frac{2}{3}$

5.  $1\frac{1}{3}$

6.  $4\frac{1}{4}$

7.  $2\frac{1}{3}$

8.  $5\frac{1}{3}$

9.  $3\frac{1}{3}$

10.  $3\frac{1}{3}$

